




Using A.M. and P.M.

I can use a.m. and p.m. to say whether things happen before or after noon.



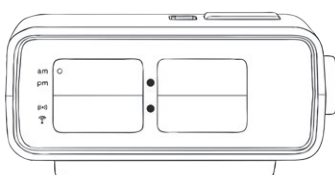
1) Write these times in digital form. One has been done for you.

a)



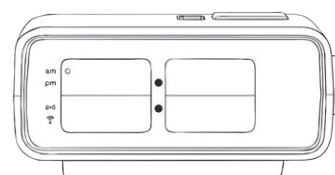
5 past 8

b)



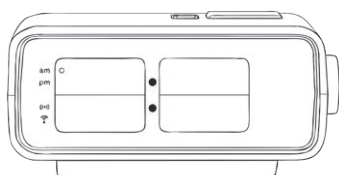
10 to 7

c)



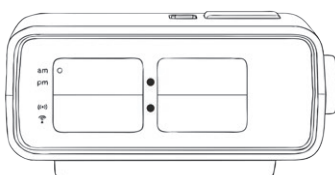
25 past 3

d)



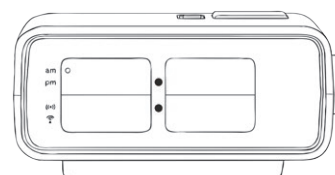
20 to 3

e)



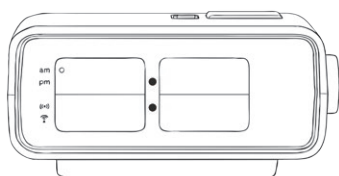
25 to 9

f)



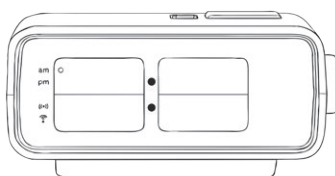
quarter past 11

g)



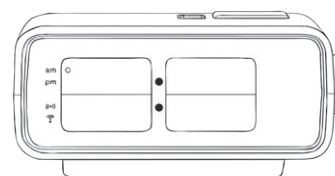
5 to 8

h)



quarter to 12

i)



20 past 3





2) Order these times from the earliest in the day to the latest.

7:20 p.m.	6:15 a.m.	11:40 p.m.	4:35 p.m.	2:50 a.m.	5:20 a.m.	11:05 p.m.	8:15 a.m.
-----------	-----------	------------	-----------	-----------	-----------	------------	-----------

earliest ←————→ latest							

3) Fill in the chart. The start and end of the school day has been done for you.

<i>school starts</i>	<i>5 past 9</i>	<i>9:05 a.m.</i>
<i>home time</i>	<i>10 past 3</i>	<i>3:10 p.m.</i>

geography 25 to 2

literacy 10 to 11

lunch time 5 past 12

art 5 to 1

maths 10 past 9

German 20 past 2

playtime 25 to 11

reading quarter past 10



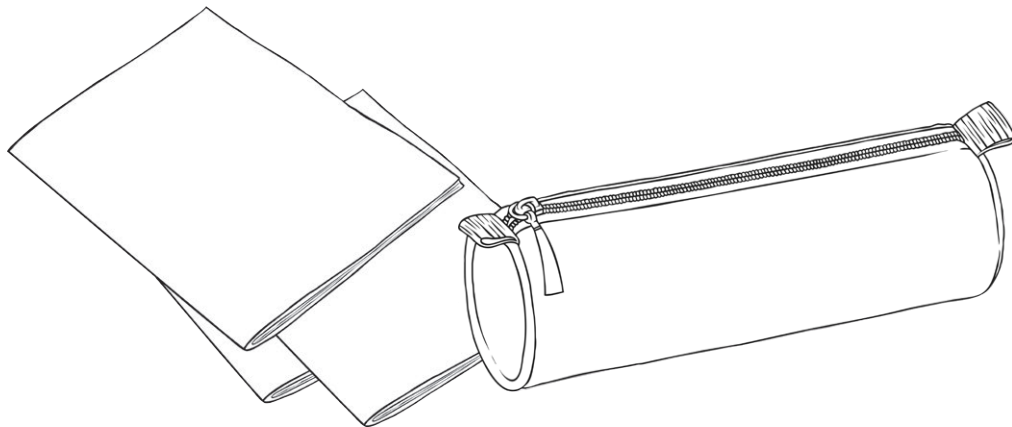
4) Answer these questions about the school day. Show your working out.

a) How long does art last? _____

b) How long does German last _____

c) How long does lunch time last? _____

d) How long does the school day last? _____





Using A.M. and P.M. Answers

Question	Answer
1. Convert these digital times into analogue times. One has been done for you:	
a.	8:05
b.	6:50
c.	3:25
d.	2:40
e.	8:35
f.	11:15
g.	7:55
h.	11:45
i.	3:20
2. Order these times from the earliest in the day to the latest:	
	2:50 a.m. 5:20 a.m. 6:15 a.m. 8:15 a.m. 4:35 p.m. 7:20 p.m. 11:05 p.m. 11:40 p.m.

3. Fill in the chart. The start and end of the school day has been done for you.		
<i>school starts</i>	<i>5 past 9</i>	<i>9:05 a.m.</i>
<i>maths</i>	<i>10 past 9</i>	<i>9:10 a.m.</i>
<i>reading</i>	<i>quarter past 10</i>	<i>10:15 a.m.</i>
<i>play time</i>	<i>25 to 11</i>	<i>10:35 a.m.</i>
<i>literacy</i>	<i>10 to 11</i>	<i>10:50 a.m.</i>
<i>lunch time</i>	<i>5 past 12</i>	<i>12:05 p.m.</i>
<i>art</i>	<i>5 to 1</i>	<i>12:55 p.m.</i>
<i>geography</i>	<i>25 to 2</i>	<i>1:35 p.m.</i>
<i>German</i>	<i>20 past 2</i>	<i>2:20 p.m.</i>
<i>home time</i>	<i>10 past 3</i>	<i>3:10 p.m.</i>
4. Answer these questions about the school day. Show your working out:		
a.	How long does art last?	40 minutes
b.	How long does German last?	50 minutes
c.	How long does lunch time last?	50 minutes
d.	How long does the school day last?	6 hours and 5 minutes